

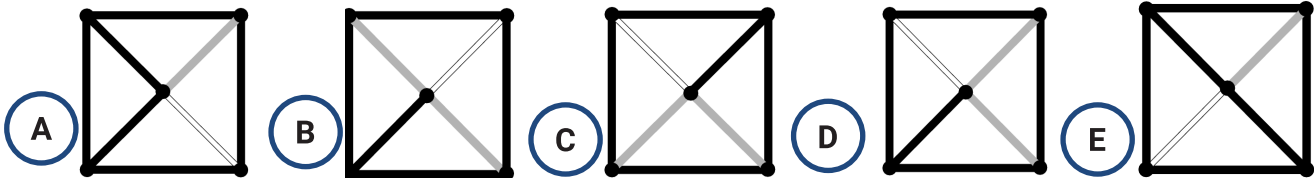
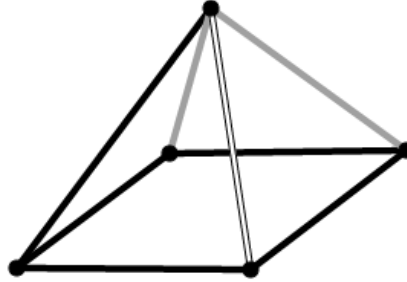


Hopp videre med

KENGURU

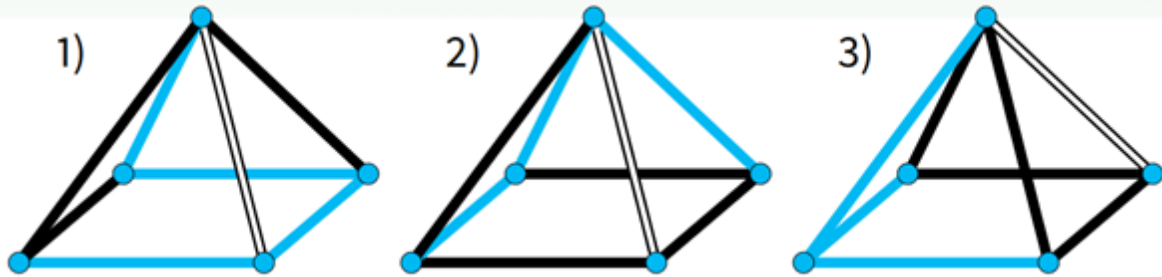
- en videre utforskning av oppgaver fra Kengurukonkurransen

Hvordan ser pyramiden ut dersom du ser den rett ovenfra?

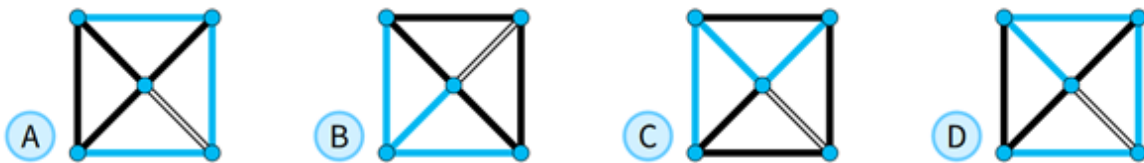


Ecolier 2020, oppgave 8

Oppgave 1)

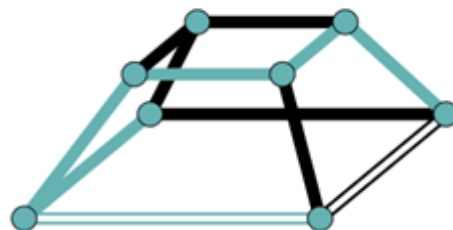
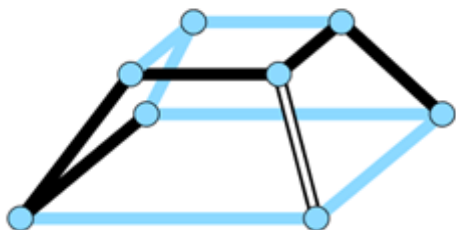


Hvordan ser hver av disse pyramidene ut dersom du ser dem rett ovenfra?


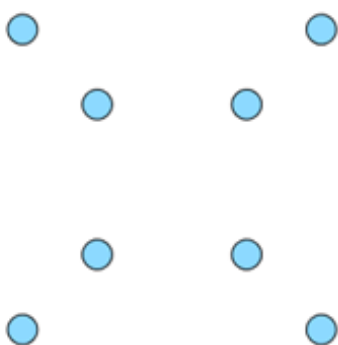




Oppgave 2)



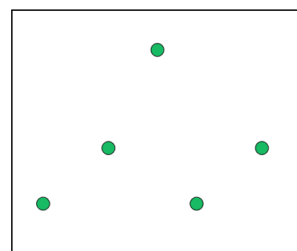
Tegn strekene til disse to figurene slik de ser ut om du ser dem rett ovenfra.



Oppgave 3)

Her er en pyramide sett rett ovenfra:

Tegn inn strekene slik pyramiden ser ut om du ser den fra den ene siden.



Tegn også inn strekene til denne pyramiden slik den ser ut om du ser den fra de tre andre sidene.

